

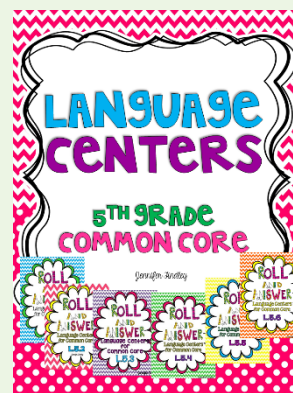


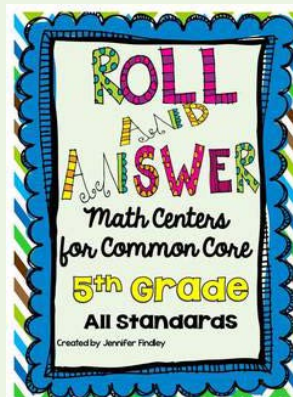
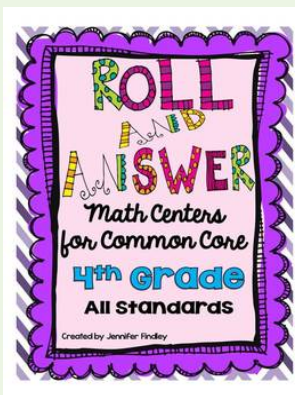
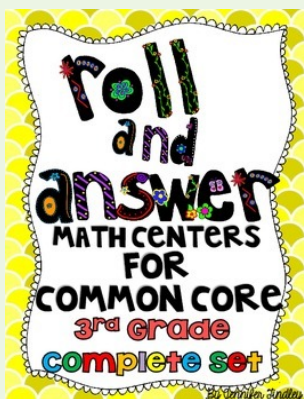


**ROLL
AND
ANSWER**

*Math Centers
Freebies*

GRADES 3-5

If you like this freebie,
check these out!



DIRECTIONS

1. Roll two dice. Add up the dice.
2. Find your number.
3. Follow the directions to answer the question.
4. Check your answer. If you are correct, write your initials in the square.

*If the number you rolled is taken, you lose a turn.

DiReCTIONS

2 Players

Player 1: Roll the dice. Add up your total. Find the roll that matches.

Player 1 and 2: Follow the directions to find the answer.
Check the answer.

If correct:

Player 1: Gets 2 points

Player 2: Gets 1 point.

Repeat steps with **Player 2** rolling the dice and getting 2 points if correct.

DiReCTIONS

3RD GRADE MATH

ROLL AND ANSWER

Roll

Add the whole numbers.

2

$$656 + 259 =$$

3

$$153 + 393 =$$

4

$$742 + 96 =$$

5

$$765 + 36 =$$

6

$$521 + 278 =$$

7

$$562 + 109 =$$

8

$$244 + 234 =$$

9

$$332 + 359 =$$

10

$$402 + 133 =$$

11

$$320 + 576 =$$

12

$$756 + 145 =$$

ROLL AND ANSWER

Roll	Add the whole numbers.
2	$656 + 259 =$
3	$153 + 393 =$
4	$742 + 96 =$
5	$765 + 36 =$
6	$521 + 278 =$
7	$562 + 109 =$
8	$244 + 234 =$
9	$332 + 359 =$
10	$402 + 133 =$
11	$320 + 576 =$
12	$756 + 145 =$

CHECK YOUR ANSWERS!

Roll	Add the whole numbers.
2	915
3	546
4	838
5	801
6	799
7	671
8	478
9	691
10	535
11	896
12	901

ROLL AND ANSWER

Roll	Determine if the number is odd or even.
2	16
3	98
4	33
5	14
6	19
7	86
8	42
9	34
10	12
11	9
12	5

ROLL AND ANSWER

Roll	Determine if the number is odd or even.
2	16
3	98
4	33
5	14
6	19
7	86
8	42
9	34
10	12
11	9
12	5

ROLL AND ANSWER

CHECK YOUR ANSWERS

Roll	Determine if the number is odd or even.
2	even
3	even
4	odd
5	even
6	odd
7	even
8	even
9	even
10	even
11	odd
12	odd

ROLL AND ANSWER

Roll	Solve the story problem.
2	There are three bags with 8 pieces of candy in each bag. How many total pieces of candy are there?
3	I have 24 carrots. If I eat 6 carrots a day, how many days will the carrots last?
4	James has a bookshelf with 5 shelves. Each shelf has 9 books on it. How many total books does James have?
5	Jerry has 7 shirts. Each shirt has 3 buttons. How many total buttons are there on Jerry's shirts?
6	Hillary has 15 pieces of gum. If he shares them equally with 3 friends, how many pieces will each friend get?
7	Ms. Clegg has 36 pencils and wants to make groups of 4 with the pencils. How many groups will she be able to make?
8	A circus worker is putting beta fish into bags. He has 24 total fish to separate equally into 8 bags. How many fish will go in bag?
9	Bobby has 49 seashells that he has collected. If he puts 7 seashells on each shelf in his room, how many shelves will he use?
10	If Tamara buys 7 packs of 8 pairs of socks, how many pairs of socks will she have?
11	Ashley wants to read 48 books this year. If she reads 8 books a month, how many months will it take her to reach her goal?
12	Batteries come in packs of 6. How many batteries are in 9 packs?

ROLL AND ANSWER

Roll	Solve the story problem.
2	There are three bags with 8 pieces of candy in each bag. How many total pieces of candy are there?
3	I have 24 carrots. If I eat 6 carrots a day, how many days will the carrots last?
4	James has a bookshelf with 5 shelves. Each shelf has 9 books on it. How many total books does James have?
5	Jerry has 7 shirts. Each shirt has 3 buttons. How many total buttons are there on Jerry's shirts?
6	Hillary has 15 pieces of gum. If he shares them equally with 3 friends, how many pieces will each friend get?
7	Ms. Clegg has 36 pencils and wants to make groups of 4 with the pencils. How many groups will she be able to make?
8	A circus worker is putting beta fish into bags. He has 24 total fish to separate equally into 8 bags. How many fish will go in bag?
9	Bobby has 49 seashells that he has collected. If he puts 7 seashells on each shelf in his room, how many shelves will he use?
10	If Tamara buys 7 packs of 8 pairs of socks, how many pairs of socks will she have?
11	Ashley wants to read 48 books this year. If she reads 8 books a month, how many months will it take her to reach her goal?
12	Batteries come in packs of 6. How many batteries are in 9 packs?

CHECK YOUR ANSWERS!

Roll	Solve the story problem.
2	There are 24 pieces of candy.
3	The carrots will last 4 days.
4	James has 45 books.
5	There are 21 buttons.
6	Each friend got 5 pieces.
7	She will be able to make 9 groups.
8	3 fish will go into each bag.
9	He will use 7 shelves.
10	She will have 56 pairs of socks.
11	It will take her 6 months.
12	There are 54 batteries in 9 packs.

4TH GRADE MATH

ROLL AND ANSWER

Roll	Determine the vocabulary term being described.
2	the answer to an addition problem
3	the answer to a multiplication problem
4	the act of splitting a total into equal groups
5	the distance around the outside of a shape
6	having equal groups and determining the total
7	a set of numbers that are sequenced using a rule
8	the answer to a division problem
9	the amount of space inside a shape, measured in square units
10	a mathematical statement that shows two things are equal, using an equal sign
11	the answer to a subtraction problem
12	part of a whole, includes a numerator and denominator

ROLL AND ANSWER

Roll	Determine the vocabulary term being described.
2	the answer to an addition problem
3	the answer to a multiplication problem
4	the act of splitting a total into equal groups
5	the distance around the outside of a shape
6	having equal groups and determining the total
7	a set of numbers that are sequenced using a rule
8	the answer to a division problem
9	the amount of space inside a shape, measured in square units
10	a mathematical statement that shows two things are equal, using an equal sign
11	the answer to a subtraction problem
12	part of a whole, includes a numerator and denominator

ROLL AND ANSWER

CHECK YOUR ANSWERS

Roll	Determine the vocabulary term being described.
2	sum
3	product
4	dividing/division
5	perimeter
6	multiplying/multiplication
7	pattern
8	quotient
9	area
10	equation
11	difference
12	fraction

ROLL AND ANSWER

Roll	Use your knowledge of numbers to answer each question.
2	What happens when you multiply a number by 1?
3	What is 10 less than 5,963? 100 less? 1,000 less?
4	Is the sum of two odd numbers odd or even?
5	Which is larger: millions or hundreds?
6	How much is half of a dollar?
7	What happens when you multiply a number by 0?
8	What is 10 more than 2,680? 100 more? 1,000 more?
9	What is 6 doubled? Tripled? Quadrupled?
10	What happens to a number when you multiply it by a whole number?
11	What do you get when you subtract a number from itself?
12	If you start with 22 and after performing an operation are left with 2, what could the operation have been?

ROLL AND ANSWER

Roll	Use your knowledge of numbers to answer each question.
2	What happens when you multiply a number by 1?
3	What is 10 less than 5,963? 100 less? 1,000 less?
4	Is the sum of two odd numbers odd or even?
5	Which is larger: millions or hundreds?
6	How much is half of a dollar?
7	What happens when you multiply a number by 0?
8	What is 10 more than 2,680? 100 more? 1,000 more?
9	What is 6 doubled? Tripled? Quadrupled?
10	What happens to a number when you multiply it by a whole number?
11	What do you get when you subtract a number from itself?
12	If you start with 22 and after performing an operation are left with 2, what could the operation have been?

ROLL AND ANSWER

CHECK YOUR ANSWERS

Roll	Use your knowledge of numbers to answer each question.
2	The number stays the same.
3	What is 10 less than 5,963? 5,953 100 less? 5,863 1,000 less? 4,863
4	Even
5	Millions
6	50 cents
7	The number turns to zero.
8	What is 10 more than 2,680? 2,670 100 more? 2,780 1,000 more? 3,680
9	What is 6 doubled? 12 Tripled? 18 Quadrupled? 24
10	The number gets larger or increases in value.
11	Zero
12	Subtraction or Division

ROLL AND ANSWER

Roll	Determine which number has the greatest value of the underlined digit.
2	7,8 <u>5</u> 3 or 6,9 <u>3</u> 5
3	123,7 <u>6</u> 9 or 723,6 <u>7</u> 8
4	<u>9</u> 89 or <u>9</u> ,153
5	1, <u>6</u> 59 or 3,3 <u>6</u> 5
6	43,51 <u>2</u> or 6 <u>2</u> 3
7	18,9 <u>3</u> 2 or 8, <u>3</u> 65
8	<u>1</u> 93 or <u>1</u> ,856
9	895,34 <u>6</u> or 54,5 <u>6</u> 0
10	5,8 <u>9</u> 2 or <u>9</u> 84
11	92 <u>8</u> ,744 or 456, <u>8</u> 59
12	<u>6</u> 5,401 or 7 <u>6</u> ,999

ROLL AND ANSWER

Roll	Determine which number has the greatest value of the underlined digit.
2	7,8 <u>5</u> 3 or 6,93 <u>5</u>
3	123,7 <u>6</u> 9 or 723,67 <u>8</u>
4	<u>9</u> 89 or <u>9</u> ,153
5	1, <u>6</u> 59 or 3,3 <u>6</u> 5
6	43,51 <u>2</u> or 6 <u>2</u> 3
7	18,9 <u>3</u> 2 or 8, <u>3</u> 65
8	<u>1</u> 93 or <u>1</u> ,856
9	895,34 <u>6</u> or 54,5 <u>6</u> 0
10	5,8 <u>9</u> 2 or <u>9</u> 84
11	92 <u>8</u> ,744 or 456, <u>8</u> 59
12	<u>6</u> 5,401 or 7 <u>6</u> ,999

ROLL AND ANSWER

CHECK YOUR ANSWERS!

Roll	Determine which number has the greatest value of the underlined digit.
2	<u>7</u> ,853 or 6,93 <u>5</u>
3	123, <u>7</u> 69 or 723,6 <u>7</u> 8
4	<u>9</u> 89 or <u>9</u> ,153
5	1, <u>6</u> 59 or 3,3 <u>6</u> 5
6	43,51 <u>2</u> or <u>6</u> 23
7	18,9 <u>3</u> 2 or <u>8</u> , <u>3</u> 65
8	<u>1</u> 93 or <u>1</u> ,856
9	895,34 <u>6</u> or <u>5</u> 4, <u>5</u> <u>6</u> 0
10	5,8 <u>9</u> 2 or <u>9</u> 84
11	<u>9</u> 2 <u>8</u> ,744 or 456, <u>8</u> 59
12	<u>6</u> 5,401 or 7 <u>6</u> ,999

ROLL AND ANSWER

Roll	Write the number in number name form.
2	7,856
3	658,189
4	13,322
5	4,001
6	302
7	101,478
8	8,700
9	378,564
10	1,235,456
11	897,046
12	1,345,611

ROLL AND ANSWER

Roll	Write the number in number name form.
2	7,856
3	658,189
4	13,322
5	4,001
6	302
7	101,478
8	8,700
9	378,564
10	1,235,456
11	897,046
12	1,345,611

ROLL AND ANSWER

CHECK YOUR ANSWERS!

Roll	Write the number in number name form.
2	7,856: seven thousand, eight hundred fifty six
3	658,189: six hundred fifty-eight thousand, one hundred eighty-nine
4	13,322: thirteen thousand, three hundred twenty-two
5	4,001: four thousand, one
6	302: three hundred two
7	101,478: one hundred one thousand, four hundred seventy-eight
8	8,700: eight thousand, seven hundred
9	378,564: three hundred seventy-eight thousand, five hundred sixty-four
10	1,235,456: one million, two hundred thirty-five thousand, four hundred fifty-six
11	897,046: eight hundred ninety-seven thousand, forty-six
12	1,345,611 one million, three hundred forty-five thousand, six hundred eleven

5TH GRADE MATH

ROLL AND ANSWER

Roll	Write the decimal in number form.
2	three tenths
3	sixty-one thousandths
4	five and twenty-one hundredths
5	six hundred eleven and three hundred one thousandths
6	eight hundred seven thousandths
7	six thousand and fifteen hundredths
8	three hundred eleven thousandths
9	four hundredths
10	Twenty-one thousandths
11	eight million, six hundred eleven thousand, one hundred five and three hundredths
12	five hundred seventy-seven and thirty-two hundredths

ROLL AND ANSWER

Roll	Write the decimal in number form.
2	three tenths
3	sixty-one thousandths
4	five and twenty-one hundredths
5	six hundred eleven and three hundred one thousandths
6	eight hundred seven thousandths
7	six thousand and fifteen hundredths
8	three hundred eleven thousandths
9	four hundredths
10	Twenty-one thousandths
11	eight million, six hundred eleven thousand, one hundred five and three hundredths
12	five hundred seventy-seven and thirty-two hundredths

ROLL AND ANSWER

CHECK YOUR ANSWERS!

Roll	Write the decimal in number form.
2	0.3
3	0.061
4	5.21
5	611.301
6	0.807
7	6,000.15
8	0.311
9	0.04
10	0.021
11	8,611,105.03
12	577.32

ROLL AND ANSWER

Roll	Solve each problem by multiplying.
2	$16 \times 15 =$
3	$30 \times 45 =$
4	$8 \times 710 =$
5	$854 \times 192 =$
6	$13 \times 967 =$
7	$65 \times 78 =$
8	$335 \times 491 =$
9	$21 \times 215 =$
10	$6 \times 549 =$
11	$874 \times 27 =$
12	$78 \times 64 =$

ROLL AND ANSWER

Roll	Solve each problem by multiplying.
2	$16 \times 15 =$
3	$30 \times 45 =$
4	$8 \times 710 =$
5	$854 \times 192 =$
6	$13 \times 967 =$
7	$65 \times 78 =$
8	$335 \times 491 =$
9	$21 \times 215 =$
10	$6 \times 549 =$
11	$874 \times 27 =$
12	$78 \times 64 =$

ROLL AND ANSWER

CHECK YOUR ANSWERS!

Roll	Solve each problem by multiplying.
2	$16 \times 15 = 240$
3	$30 \times 45 = 1,350$
4	$8 \times 710 = 5,680$
5	$854 \times 192 = 163,968$
6	$13 \times 967 = 12,571$
7	$65 \times 78 = 5,070$
8	$335 \times 491 = 164,485$
9	$21 \times 215 = 4,515$
10	$6 \times 549 = 3,294$
11	$874 \times 27 = 23,598$
12	$78 \times 64 = 4,992$

ROLL AND ANSWER

Roll	Name the shape that is being described.
2	A three sided shape with all acute angles.
3	A shape with four right angles and four sides of the same length.
4	A four sided shape with only one pair of parallel lines.
5	A three sided shape with one right angle.
6	A polygon with eight sides and eight angles.
7	Any shape with four sides and four angles.
8	A three sided shape with one obtuse angle.
9	A polygon with six sides and six angles.
10	A three sided shape with all sides the same length.
11	A closed two dimensional shape made up of line segments.
12	A three sided with all sides of a different length.

ROLL AND ANSWER

Roll	Name the shape that is being described.
2	A three sided shape with all acute angles.
3	A shape with four right angles and four sides of the same length.
4	A four sided shape with only one pair of parallel lines.
5	A three sided shape with one right angle.
6	A polygon with eight sides and eight angles.
7	Any shape with four sides and four angles.
8	A three sided shape with one obtuse angle.
9	A polygon with six sides and six angles.
10	A three sided shape with all sides the same length.
11	A closed two dimensional shape made up of line segments.
12	A three sided with all sides of a different length.

ROLL AND ANSWER

CHECK YOUR ANSWERS!

Roll	Name the shape that is being described.
2	acute triangle or equilateral triangle
3	square
4	trapezoid
5	right triangle
6	octagon
7	quadrilateral
8	obtuse triangle
9	hexagon
10	equilateral triangle
11	polygon
12	scalene triangle

This resource was created by Jennifer Findley. It may be printed and photocopied for single classroom use. It may not be put on the Internet, sold, or distributed in any form. Check out my store for more resources that are common core aligned.



Follow my blog for updates and freebies.



Thanks!
Jennifer Findley



KPM Doodles

