



Jennifer Findley

The Answer is....


**What is the
Problem?**

Task Cards



Directions:

On each task card, you will find the answer to a math problem. You are to create a word problem that would give that answer. You may use any operation you choose. The problems may be one step or two step problems.



**Grades
5-6
Version**

The answer is...

There are $6 \frac{1}{2}$ rows of carrots left to be harvested.

What is the problem?

1

The answer is...

Devonte drank three times as much lemonade as Noe.

What is the problem?

2

The answer is...

Tia could tie water balloons 5.5 seconds faster than Ricardo.

What is the problem?

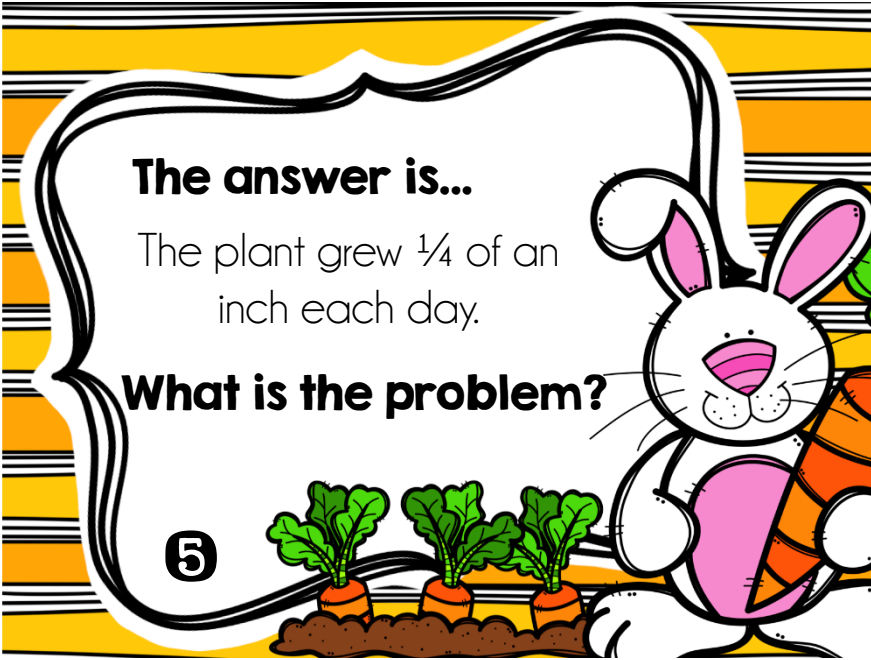
3

The answer is...

It took $12 \frac{3}{4}$ gallons of water to fill the balloons.

What is the problem?

4

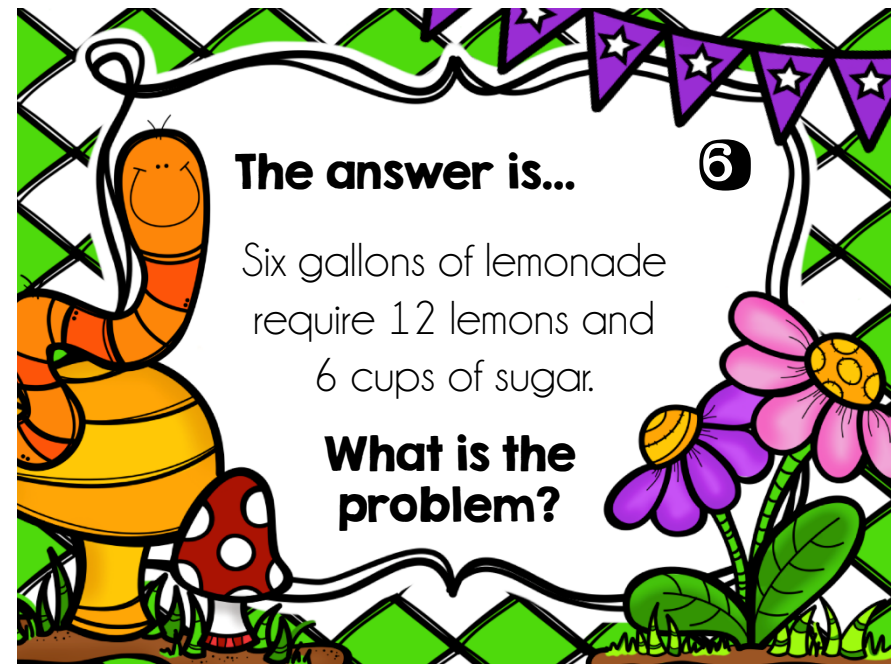


The answer is...

The plant grew $\frac{1}{4}$ of an inch each day.

What is the problem?

5

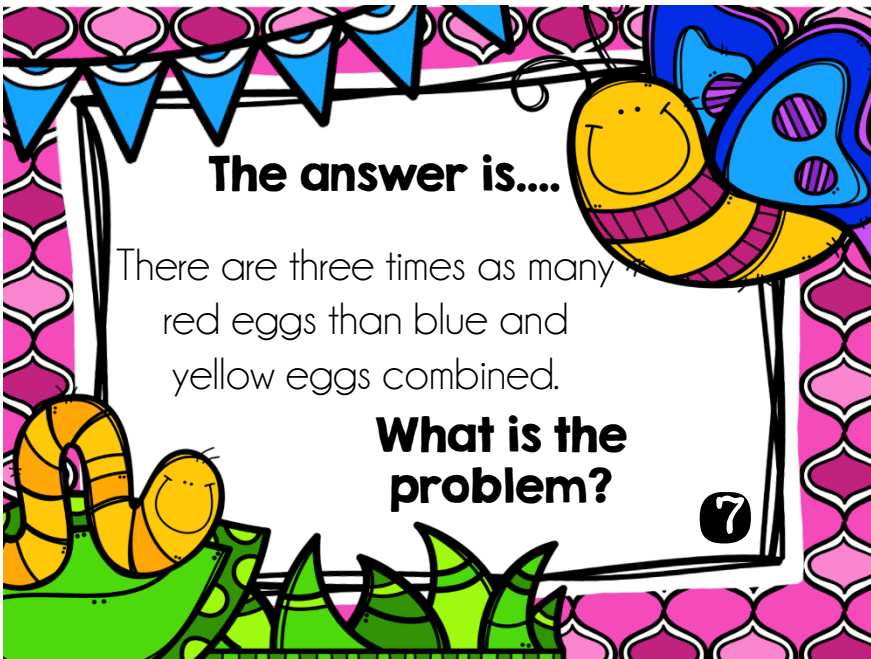


The answer is...

Six gallons of lemonade require 12 lemons and 6 cups of sugar.

What is the problem?

6




The answer is...

There are three times as many red eggs than blue and yellow eggs combined.

What is the problem?

7



The answer is...

Each beehive has 315 bees.

What is the problem?

8

The answer is...

It took Burandi 3.25 hours to plant all of the seeds.

What is the problem?

9

The answer is... 10

There are $2\frac{3}{4}$ cups of lemonade remaining.

What is the problem?

The answer is...

Haylee painted $\frac{1}{2}$ as many eggs than Adolfo.


What is the problem?

11

The answer is... 12

$2\frac{1}{2}$ bunny cupcakes had not been eaten.

What is the problem?



**Grades
3-4
Version**

The answer is...

It took 2 hours to mow the grass.

What is the problem?

1

The answer is...

It will take 3 buses to carry all of the visitors to the Spring Festival.

What is the problem?

2

The answer is...

Penny's mom made 4 gallons of lemonade.

What is the problem?

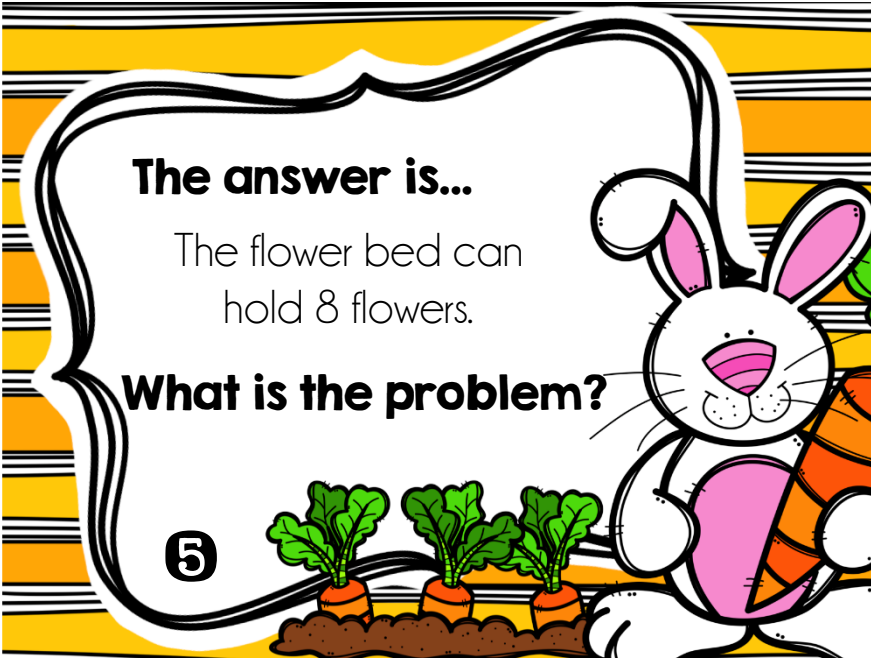
3

The answer is...

There are a total of 212 people at the fair.

What is the problem?

4

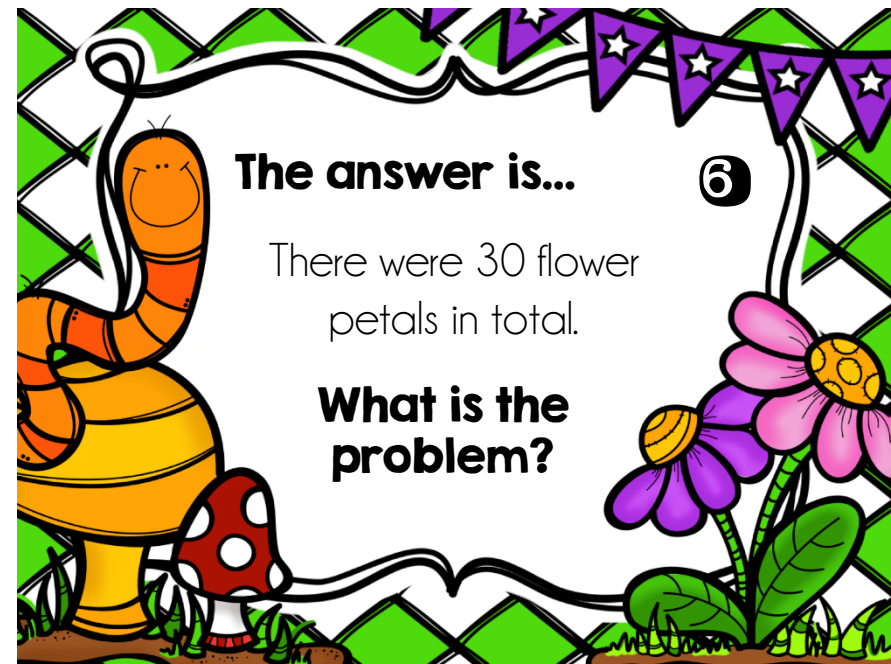


The answer is...

The flower bed can hold 8 flowers.

What is the problem?

5

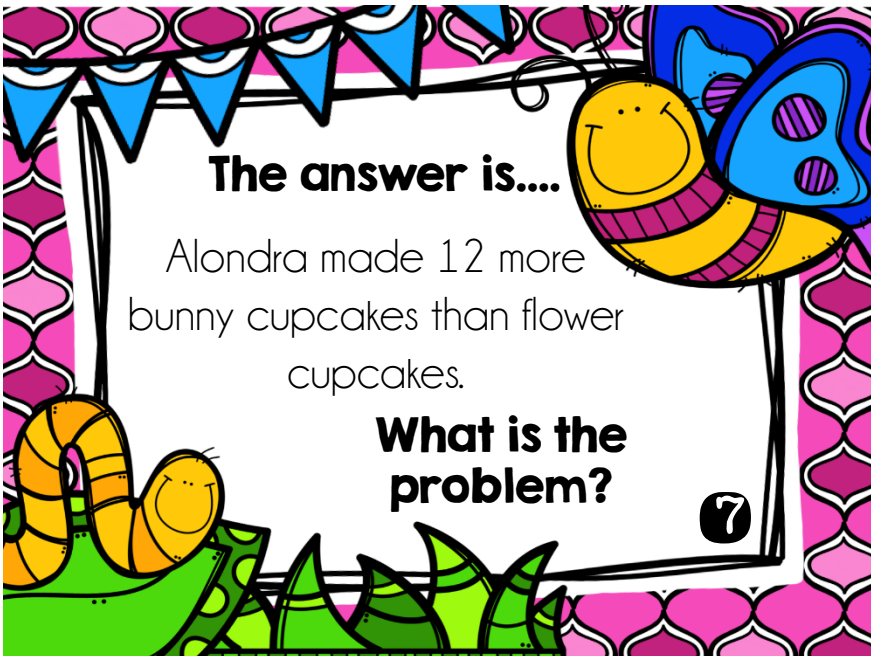


The answer is...

There were 30 flower petals in total.

What is the problem?

6

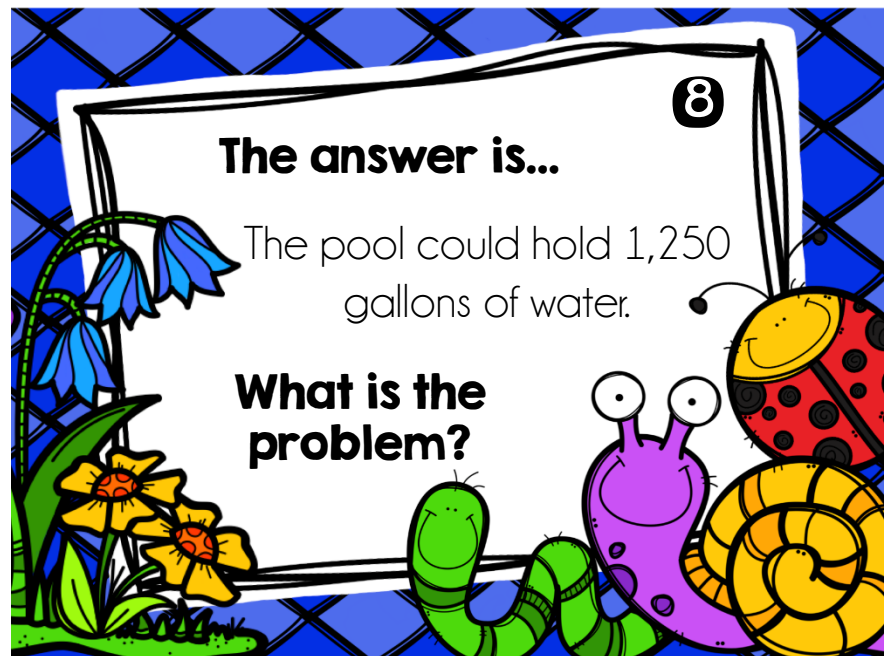


The answer is...

Alondra made 12 more bunny cupcakes than flower cupcakes.

What is the problem?

7



The answer is...

The pool could hold 1,250 gallons of water.

What is the problem?

8

The answer is...

Petri saw a combined total of 14 butterflies.

What is the problem?

9

The answer is... 10

Both picnic baskets could hold 27 sandwiches.

What is the problem?

The answer is...

Tony painted 8 more eggs than his sister.

What is the problem?

11

The answer is... 12

There were twice as many blue eggs as red eggs.

What is the problem?

Recording Sheet

Name: _____ Date: _____

1

2

3

4

5

6

7

8

9

10

11

12

Recording Sheet

I of 2

Name: _____ Date: _____

1

2

3

4

5

6

Recording Sheet

2 of 2

Name: _____ Date: _____

7

8

9

10

11

12

This resource was created by Jennifer Findley. It may be printed and photocopied for single classroom use. It may not be put on the Internet, sold, or distributed in any form. Check out my store for more resources that are common core aligned.



Follow my blog for updates and freebies.

www.JenniferFindley.com

Thanks!
Jennifer Findley

Credits:

