


3RD GRADE MATH

task cards



**COLOR AND
BLACK &
WHITE
VERSIONS
INCLUDED**

3.NBT.3: 32 TASK CARDS

BLACK AND

WHITE

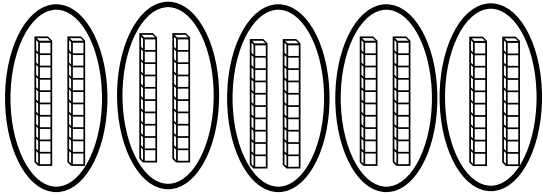
VERSION



I can multiply
one-digit
whole
numbers by
multiples of 10.

MATH TASK CARD

Write the multiplication equation represented by the model and solve.

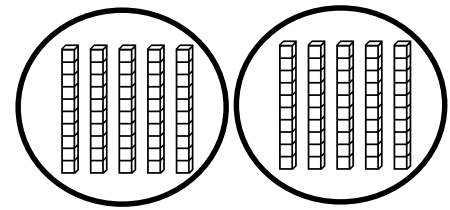


3.NBT.3

1

MATH TASK CARD

Write the multiplication equation represented by the model and solve.

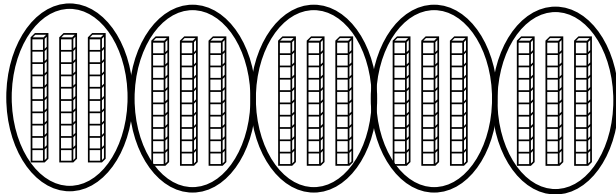


3.NBT.3

2

MATH TASK CARD

Write the multiplication equation represented by the model and solve.

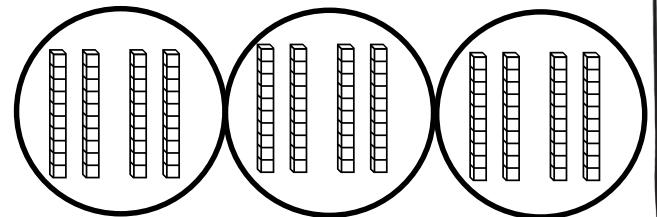


3.NBT.3

3

MATH TASK CARD

Write the multiplication equation represented by the model and solve.



3.NBT.3

4

MATH TASK CARD

Create a model with base ten blocks for this equation and solve.

$$4 \times 30 =$$

3.NBT.3

5

MATH TASK CARD

Create a model with base ten blocks for this equation and solve.

$$2 \times 50 =$$

3.NBT.3

6

MATH TASK CARD

Create a model with base ten blocks for this equation and solve.

$$3 \times 50 =$$

3.NBT.3

7

MATH TASK CARD

Create a model with base ten blocks for this equation and solve.

$$8 \times 20 =$$

3.NBT.3

8

MATH TASK CARD

Solve. Show your work, or explain your thinking.

$$7 \times 20 =$$

3.NBT.3

9

MATH TASK CARD

Solve. Show your work, or explain your thinking.

$$4 \times 40 =$$

3.NBT.3

10

MATH TASK CARD

Solve. Show your work, or explain your thinking.

$$5 \times 50 =$$

3.NBT.3

11

MATH TASK CARD

Solve. Show your work, or explain your thinking.

$$5 \times 80 =$$

3.NBT.3

12

MATH TASK CARD

Solve. Show your work, or explain your thinking.

$$9 \times 30 =$$

3.NBT.3

13

MATH TASK CARD

Solve. Show your work, or explain your thinking.

$$2 \times 80 =$$

3.NBT.3

14

MATH TASK CARD

Solve. Show your work, or explain your thinking.

$$6 \times 40 =$$

3.NBT.3

15

MATH TASK CARD

Solve. Show your work, or explain your thinking.

$$5 \times 90 =$$

3.NBT.3

16

MATH TASK CARD

Solve. Show your work, or explain your thinking.

$$8 \times 30 =$$

3.NBT.3

17

MATH TASK CARD

Solve. Show your work, or explain your thinking.

$$7 \times 80 =$$

3.NBT.3

18

MATH TASK CARD

Solve. Show your work, or explain your thinking.

$$6 \times 20 =$$

3.NBT.3

19

MATH TASK CARD

Solve. Show your work, or explain your thinking.

$$3 \times 70 =$$

3.NBT.3

20

MATH TASK CARD

Solve. Show your work, or explain your thinking.

$$5 \times 60 =$$

3.NBT.3

21

MATH TASK CARD

Solve. Show your work, or explain your thinking.

$$9 \times 80 =$$

3.NBT.3

22

MATH TASK CARD

Solve. Show your work, or explain your thinking.

$$7 \times 70 =$$

3.NBT.3

23

MATH TASK CARD

Solve. Show your work, or explain your thinking.

$$3 \times 90 =$$

3.NBT.3

24

MATH TASK CARD

Mrs. Nunez bought 4 boxes of chips for a class party. Each box contained 20 bags of chips. How many bags of chips did Mrs. Nunez buy in all?

3.NBT.3

25

MATH TASK CARD

Raul reads each day of the week (7 days) for 30 minutes. How many minutes does he read in a week?

3.NBT.3

26

MATH TASK CARD

A bookstore has 6 shelves of children's books. Each shelf has 30 books on it. How many books are on all of the shelves?

3.NBT.3

27

MATH TASK CARD

At a concert, there are 5 different sections. Each section holds 50 people. How many people can sit in all 5 sections?

3.NBT.3

28

MATH TASK CARD

Hiram's mom bought him 3 packs of pencils for school. Each pack contained 30 pencils. How many pencils did she buy for him?

3.NBT.3

29

MATH TASK CARD

A grocery store sells mini cookies in packs of 40 mini cookies each. How many mini cookies are in 8 bags?

3.NBT.3

30

MATH TASK CARD

A mom is making snack bags for her five children. She wants to put 30 goldfish crackers in each bag. How many goldfish crackers will she need?

3.NBT.3

31

MATH TASK CARD


A candy store sells gummy bears in bags of 20 gummy bears each. How many gummy bears are in 6 bags?

3.NBT.3

32

COLOR

VERSION



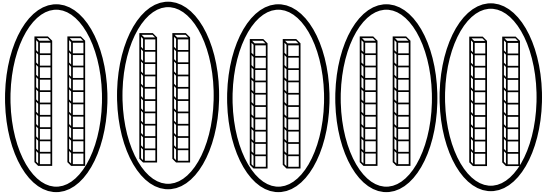
I can multiply
one-digit
whole
numbers by
multiples of 10.

3.NBT.3

©2012

MATH TASK CARD

Write the multiplication equation represented by the model and solve.

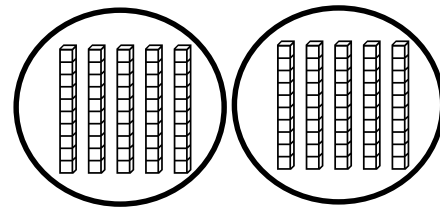


3.NBT.3

1

MATH TASK CARD

Write the multiplication equation represented by the model and solve.

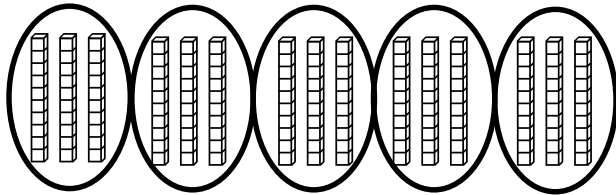


3.NBT.3

2

MATH TASK CARD

Write the multiplication equation represented by the model and solve.

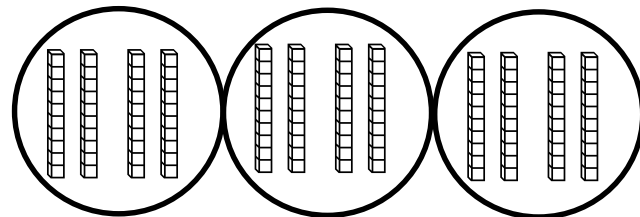


3.NBT.3

3

MATH TASK CARD

Write the multiplication equation represented by the model and solve.



3.NBT.3

4

MATH TASK CARD

Create a model with base ten blocks for this equation and solve.

$$4 \times 30 =$$

3.NBT.3

5

MATH TASK CARD

Create a model with base ten blocks for this equation and solve.

$$2 \times 50 =$$

3.NBT.3

6

MATH TASK CARD

Create a model with base ten blocks for this equation and solve.

$$3 \times 50 =$$

3.NBT.3

7

MATH TASK CARD

Create a model with base ten blocks for this equation and solve.

$$8 \times 20 =$$

3.NBT.3

8

MATH TASK CARD

Solve. Show your work, or explain your thinking.

$$7 \times 20 =$$

3.NBT.3

9

MATH TASK CARD

Solve. Show your work, or explain your thinking.

$$4 \times 40 =$$

3.NBT.3

10

MATH TASK CARD

Solve. Show your work, or explain your thinking.

$$5 \times 50 =$$

3.NBT.3

11

MATH TASK CARD

Solve. Show your work, or explain your thinking.

$$5 \times 80 =$$

3.NBT.3

12

MATH TASK CARD

Solve. Show your work, or explain your thinking.

$$9 \times 30 =$$

3.NBT.3

13

MATH TASK CARD

Solve. Show your work, or explain your thinking.

$$2 \times 80 =$$

3.NBT.3

14

MATH TASK CARD

Solve. Show your work, or explain your thinking.

$$6 \times 40 =$$

3.NBT.3

15

MATH TASK CARD

Solve. Show your work, or explain your thinking.

$$5 \times 90 =$$

3.NBT.3

16

MATH TASK CARD

Solve. Show your work, or explain your thinking.

$$8 \times 30 =$$

3.NBT.3

17

MATH TASK CARD

Solve. Show your work, or explain your thinking.

$$7 \times 80 =$$

3.NBT.3

18

MATH TASK CARD

Solve. Show your work, or explain your thinking.

$$6 \times 20 =$$

3.NBT.3

19

MATH TASK CARD

Solve. Show your work, or explain your thinking.

$$3 \times 70 =$$

3.NBT.3

20

MATH TASK CARD

Solve. Show your work, or explain your thinking.

$$5 \times 60 =$$

3.NBT.3

21

MATH TASK CARD

Solve. Show your work, or explain your thinking.

$$9 \times 80 =$$

3.NBT.3

22

MATH TASK CARD

Solve. Show your work, or explain your thinking.

$$7 \times 70 =$$

3.NBT.3

23

MATH TASK CARD

Solve. Show your work, or explain your thinking.

$$3 \times 90 =$$

3.NBT.3

24

MATH TASK CARD

Mrs. Nunez bought 4 boxes of chips for a class party. Each box contained 20 bags of chips. How many bags of chips did Mrs. Nunez buy in all?

3.NBT.3

25

MATH TASK CARD

Raul reads each day of the week (7 days) for 30 minutes. How many minutes does he read in a week?

3.NBT.3

26

MATH TASK CARD

A bookstore has 6 shelves of children's books. Each shelf has 30 books on it. How many books are on all of the shelves?

3.NBT.3

27

MATH TASK CARD

At a concert, there are 5 different sections. Each section holds 50 people. How many people can sit in all 5 sections?

3.NBT.3

28

MATH TASK CARD

Hiram's mom bought him 3 packs of pencils for school. Each pack contained 30 pencils. How many pencils did she buy for him?

3.NBT.3

29

MATH TASK CARD

A grocery store sells mini cookies in packs of 40 mini cookies each. How many mini cookies are in 8 bags?

3.NBT.3

30

MATH TASK CARD

A mom is making snack bags for her five children. She wants to put 30 goldfish crackers in each bag. How many goldfish crackers will she need?

3.NBT.3

31

MATH TASK CARD

A candy store sells gummy bears in bags of 20 gummy bears each. How many gummy bears are in 6 bags?

3.NBT.3

32

Recording Sheet: Math Task Cards (3.NBT.3)

Name: _____ Date: _____

1.	2.	3.	4.
5.	6.	7.	8.
9.	10.	11.	12.
13.	14.	15.	16.
17.	18.	19.	20.
21.	22.	23.	24.
25.	26.	27.	28.
29.	30.	31.	32.

Name: _____ Date: _____

1.	2.	3.	4.
5.	6.	7.	8.
9.	10.	11.	12.
13.	14.	15.	16.

Name: _____ Date: _____

17.	18.	19.	20.
21.	22.	23.	24.
25.	26.	27.	28.
29.	30.	31.	32.

Answer Key: Math Task Cards (3.NBT.3)

1.) $5 \times 20 = 100$	2.) $2 \times 50 = 100$	3.) $5 \times 30 = 150$	4.) $3 \times 40 = 120$
5.) 120	6.) 100	7.) 150	8.) 160
9.) 140	10.) 160	11.) 250	12.) 400
13.) 270	14.) 160	15.) 240	16.) 450
17.) 240	18.) 560	19.) 120	20.) 210
21.) 300	22.) 720	23.) 490	24.) 270
25) 80 bags of chips	26.) 210 minutes	27.) 180 books	28.) 250 people
29.) 90 pencils	30.) 320 mini cookies	31.) 150 goldfish crackers	32.) 120 gummy bears

This resource was created by Jennifer Findley. It may be printed and photocopied for single classroom use. It may not be put on the Internet, sold, or distributed in any form. Check out my store for more resources that are common core aligned.



Follow my blog for updates and freebies.



Thanks!
Jennifer Findley

